


Name : _____

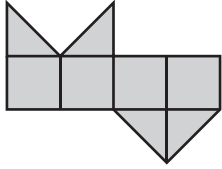
Counting Squares

L2S3

 = 1 yd²

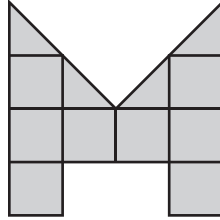
Find the area of each shape.

1)



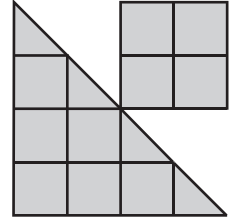
Area = yd²

2)



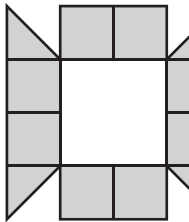
Area = yd²

3)



Area = yd²

4)



Area =

5)

PREVIEW

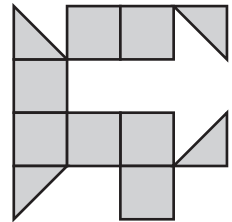
Gain complete access to the largest collection of worksheets in all subjects!

Members, please log in to download this worksheet.

Not a member? Please sign up to gain complete access.

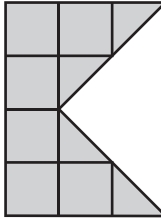
www.mathworksheets4kids.com

6)

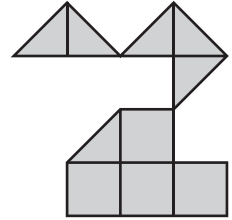


Area = yd²

7)

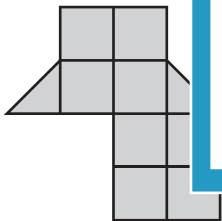


Area =



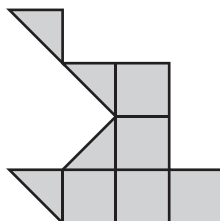
Area = yd²

10)



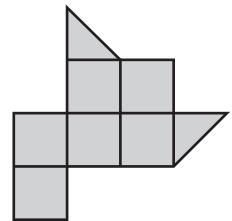
Area = yd²

14)



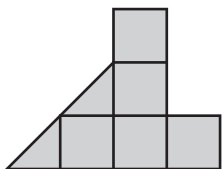
Area = yd²

15)

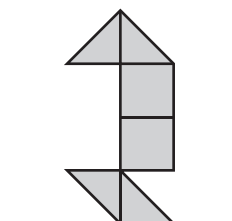


Area = yd²

13)



Area = yd²



Area = yd²