


Name : _____

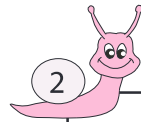
Addition and Subtraction

Sheet 1



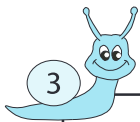
Circle the two numbers whose difference is 563.

525 73 62 636



Circle the two numbers whose sum is 188.

250 81 56 132



Circle the two numbers wh

752 620

PREVIEW

Gain complete access to the largest collection of worksheets in all subjects!

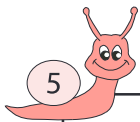
Members, please log in to download this worksheet.

Not a member? Please sign up to gain complete access.

www.mathworksheets4kids.com

bers whose difference is 81.

4 436 856

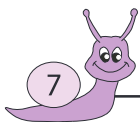


Circle the two numbers wh

740 853

bers whose sum is 1,339.

? 621 545



Circle the two numbers wh

398 16 46 457

bers whose difference is 6.

510 900 906 496



Circle the two numbers whose difference is 602.

48 23 67 669



Circle the two numbers whose sum is 996.

832 32 192 164