


Name : _____

Addition and Subtraction

Sheet 2



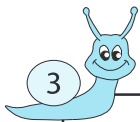
Circle the two numbers whose sum is 978.

172 746 806 152



Circle the two numbers whose difference is 693.

49 18 711 23



Circle the two numbers wh

322 420

PREVIEW

Gain complete access to the largest
collection of worksheets in all subjects!

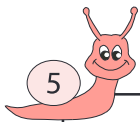
Members, please
log in to
download this
worksheet.

Not a member?
Please sign up to
gain complete
access.

www.mathworksheets4kids.com

bers whose sum is 1,342.

7 698 745

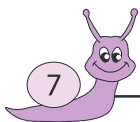


Circle the two numbers wh

653 80

bers whose difference is 821.

924 226



Circle the two numbers wh

188 256 888 951

bers whose sum is 1,040.

59 664 46 994



Circle the two numbers whose sum is 797.

783 14 636 183



Circle the two numbers whose difference is 2.

268 73 266 95