


Name : _____

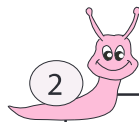
Addition and Subtraction

Sheet 3



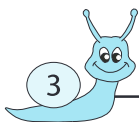
Circle the two numbers whose difference is 14.

98 472 486 33



Circle the two numbers whose difference is 637.

782 10 174 647



Circle the two numbers wh

253 126

PREVIEW

Gain complete access to the largest
collection of worksheets in all subjects!

Members, please
log in to
download this
worksheet.

Not a member?
Please sign up to
gain complete
access.

www.mathworksheets4kids.com

bers whose sum is 432.

2 360 72

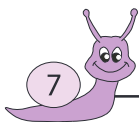


Circle the two numbers wh

45 946

bers whose difference is 833.

8 12 119



Circle the two numbers wh

610 93 87 58

bers whose sum is 1,361.

168 832 529 488



Circle the two numbers whose difference is 78.

586 820 284 664



Circle the two numbers whose difference is 451.

37 488 76 95