

Addition and Subtraction

Count the pips on each pair of dice and write the sum or difference in the boxes.





1)  -  =

2)  +  =

3)  +  =  =

5)  -  =  =

7)  +  =  =

9)  -  = 10)  +  =

11)  +  =

12)  -  =

PREVIEW

Gain complete access to the largest collection of worksheets in all subjects!

Members, please log in to download this worksheet.

Not a member? Please sign up to gain complete access.

www.mathworksheets4kids.com