




# Addition and Subtraction



Count the pictures in each set and write the addition or subtraction sentence.

1)  -  = \_\_\_\_\_

2)  = \_\_\_\_\_

3)  = \_\_\_\_\_

4)  + \_\_\_\_\_ = \_\_\_\_\_

5)  -  = \_\_\_\_\_

**PREVIEW**

Gain complete access to the largest collection of worksheets in all subjects!

Members, please log in to download this worksheet.

Not a member? Please sign up to gain complete access.

[www.mathworksheets4kids.com](http://www.mathworksheets4kids.com)