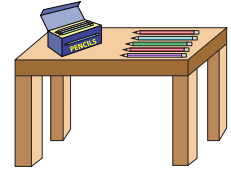


Name : _____

Single Digit Addition

Sheet 3

- 1) After tea, it was time for Lara and friends to play bingo. She looked around for pencils and found 5 on her desk and 3 in her pencil case. How many pencils did she find in all?

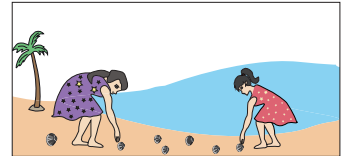


- 2) Ashley makes a hand bouquet. If she uses 9 red roses and 6 white roses, how many roses does she use in total?



- 3) Susan collected 6 seashells on the beach and her friend collected 4 seashells. How many seashells did they collect altogether?

_____ How many seashells did they collect



- 4) Coach Andrew has 9 red balls and 4 blue balls. How many balls does he have in all?

PREVIEW
Gain complete access to the largest collection of worksheets in all subjects!

Members, please log in to download this worksheet.

Not a member? Please sign up to gain complete access.

www.mathworksheets4kids.com

_____ How many balls does he have in all?




- 5) Jude has 2 smiley stickers and his friend has 3 smiley stickers. How many smiley stickers do they have in all?

_____ How many smiley stickers do they have in all?



- 6) Sarah ordered two pizzas. If each pizza is cut into 8 slices, how many slices of pizza were there in all?

_____ How many slices of pizza were there



- 7) Ruby has 6 cookies in her plate. Lily gives her 3 more. How many cookies does Ruby have now?

