

Name : _____

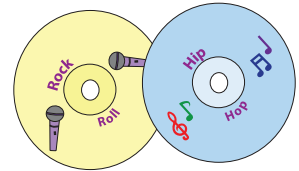
Two-Digit Addition - Regrouping

Sheet 1

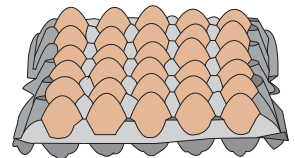
- 1) The Bells had a family get-together on Sunday. Hannah made 65 blueberry pancakes and baked 55 muffins. How many goodies in all did Hannah make for the get-together?



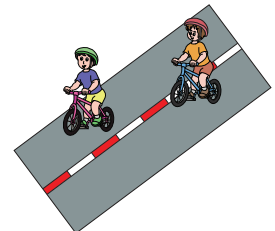
- 2) Alex has recorded 76 minutes of rock-and-roll music and 69 minutes of hip-hop on his MP3 CD. How many minutes of recording does he have stored on the disk?



- 3) Judy bought two crates of pasture-raised eggs. There were 36 eggs in one crate and 96 eggs in the other. How many eggs were there in all?



- 4) Juan completes 2 laps on a cycling track. He clocks 34 seconds for the first lap and takes 49 seconds to complete the second lap. How many seconds did he clock in total to complete the 2 laps?



- 5) The auditorium is located on the second floor. Rebecca climbs 28 steps to reach the first floor. If she goes up a flight of 35 steps to reach the second floor, how many steps does Rebecca climb in all?

