

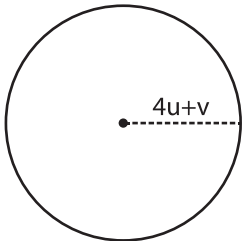
Name : \_\_\_\_\_

**Algebra: Measurement**

Multi Variables: S5

Find the measurement.

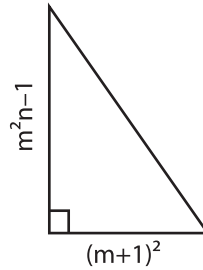
1)  $u = 1, v = 5$



Radius = \_\_\_\_\_

Diameter = \_\_\_\_\_

2)  $m = -3, n = 2$



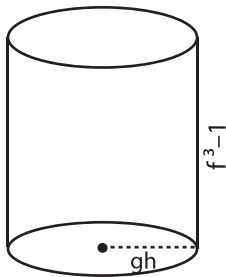
3)  $s = 4, t = 3, u = 2$



Length = \_\_\_\_\_

Width = \_\_\_\_\_

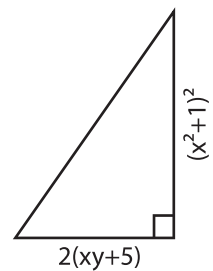
4)  $f = 2, g = -4, h = -2$



Height = \_\_\_\_\_

Radius = \_\_\_\_\_

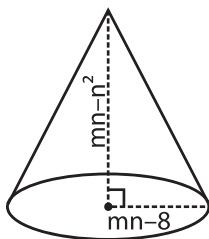
$x = -1, y = 4$



Height = \_\_\_\_\_

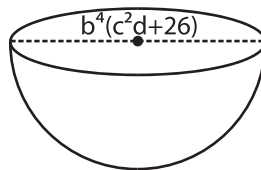
Base = \_\_\_\_\_

7)  $m = 7, n = 3$



Radius = \_\_\_\_\_

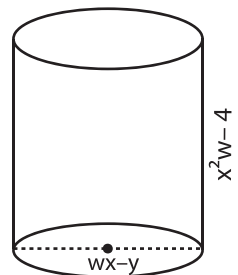
Height = \_\_\_\_\_



Diameter = \_\_\_\_\_

Radius = \_\_\_\_\_

$w = 4, x = 2, y = -1$



Height = \_\_\_\_\_

Diameter = \_\_\_\_\_

**PREVIEW**

Gain complete access to the largest collection of worksheets in all subjects!

Members, please log in to download this worksheet.

Not a member? Please sign up to gain complete access.

[www.mathworksheets4kids.com](http://www.mathworksheets4kids.com)