

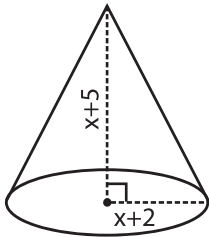
Name : \_\_\_\_\_

## Algebra: Measurement

Single Variable: S1

Find the measurement.

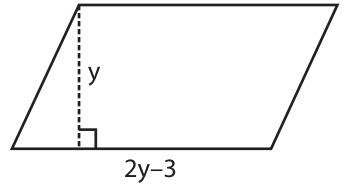
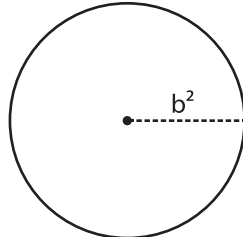
1)  $x = 1$



Radius = \_\_\_\_\_

Height = \_\_\_\_\_

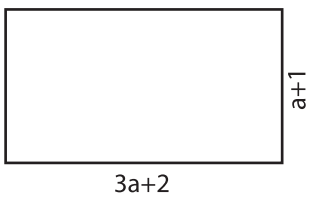
2)  $b = 2$



Base = \_\_\_\_\_

Height = \_\_\_\_\_

4)  $a = 3$



Length = \_\_\_\_\_

Width = \_\_\_\_\_

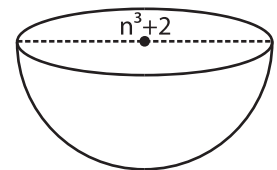
**PREVIEW**  
Gain complete access to the largest collection of worksheets in all subjects!

Members, please log in to download this worksheet.

Not a member? Please sign up to gain complete access.

[www.mathworksheets4kids.com](http://www.mathworksheets4kids.com)

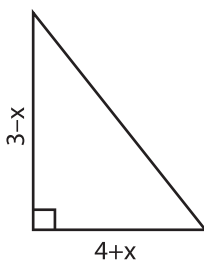
$n = 2$



Radius = \_\_\_\_\_

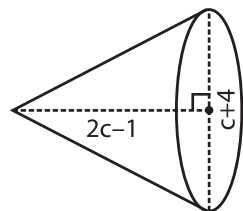
Diameter = \_\_\_\_\_

7)  $x = -1$



Base = \_\_\_\_\_

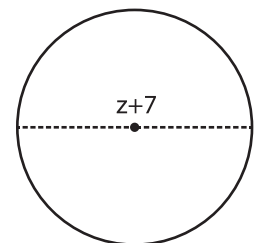
Height = \_\_\_\_\_



Height = \_\_\_\_\_

Diameter = \_\_\_\_\_

$z = -3$



Radius = \_\_\_\_\_

Diameter = \_\_\_\_\_