

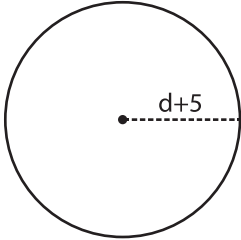
Name : _____

Algebra: Measurement

Single Variable: S2

Find the measurement.

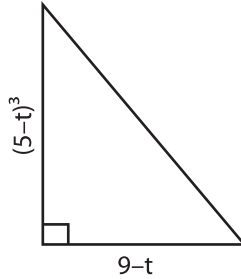
1) $d = -2$



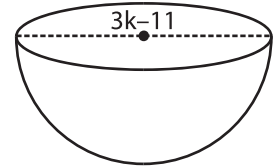
Radius = _____

Diameter = _____

2) $t = 3$



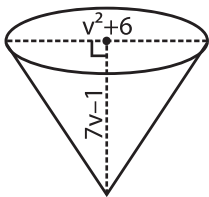
3) $k = 7$



Radius = _____

Diameter = _____

4) $v = 1$



Diameter = _____

Height = _____

PREVIEW

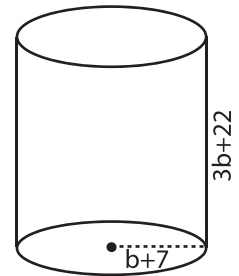
Gain complete access to the largest collection of worksheets in all subjects!

Members, please log in to download this worksheet.

Not a member? Please sign up to gain complete access.

www.mathworksheets4kids.com

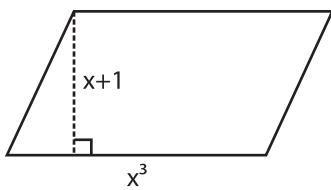
$b = -5$



Radius = _____

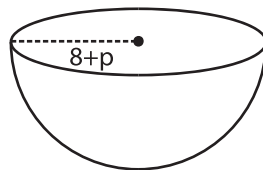
Height = _____

7) $x = 2$



Base = _____

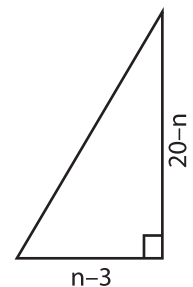
Height = _____



Radius = _____

Diameter = _____

$n = 8$



Base = _____

Height = _____