

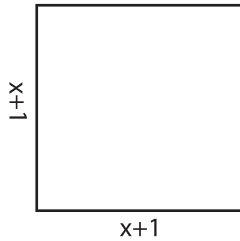
Name : \_\_\_\_\_

## Area & Perimeter

Sheet 1

Find the area and perimeter of each rectangle.

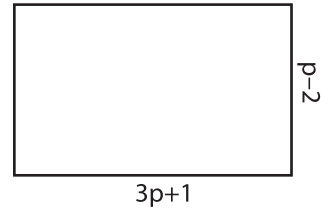
1)



Area = \_\_\_\_\_

Perimeter = \_\_\_\_\_

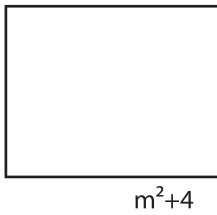
2)



Area = \_\_\_\_\_

Perimeter = \_\_\_\_\_

3)



Area = \_\_\_\_\_

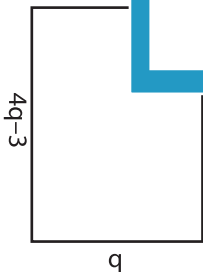
Perimeter = \_\_\_\_\_



Area = \_\_\_\_\_

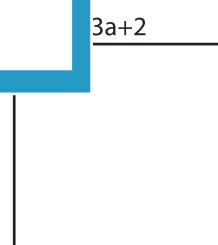
Perimeter = \_\_\_\_\_

5)



Area = \_\_\_\_\_

Perimeter = \_\_\_\_\_



Area = \_\_\_\_\_

Perimeter = \_\_\_\_\_

**PREVIEW**

Gain complete access to the largest collection of worksheets in all subjects!

Members, please log in to download this worksheet.

Not a member? Please sign up to gain complete access.

[www.mathworksheets4kids.com](http://www.mathworksheets4kids.com)