

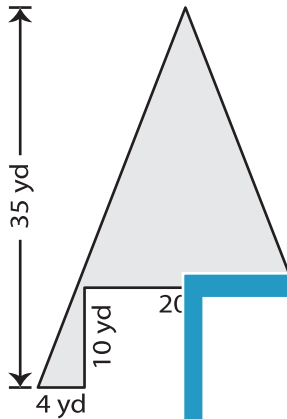
Name : _____

Area - Compound Shapes

L153

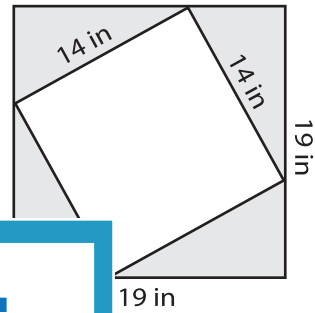
Find the area of the shaded region in each figure. Round your answer to 2 decimal places if required. (Use $\pi = 3.14$)

1)



Area = _____

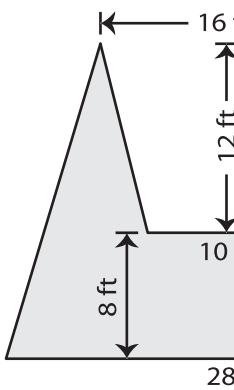
2)



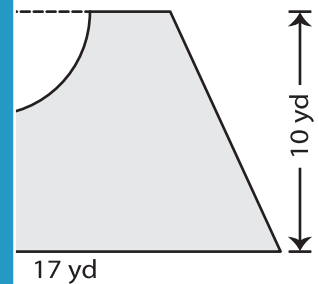
19 in

Area = _____

3)



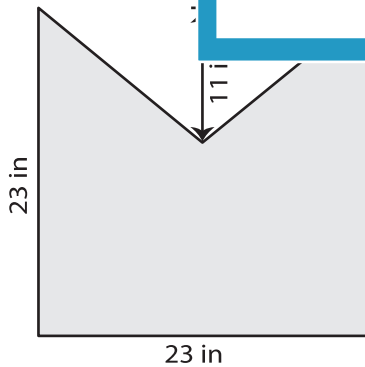
Area = _____



17 yd

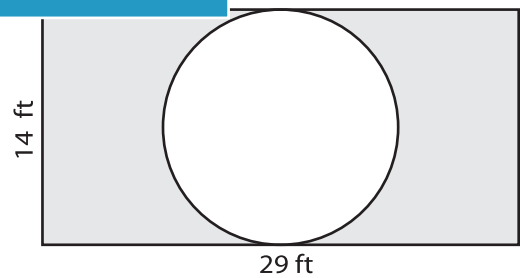
Area = _____

5)



23 in

Area = _____



29 ft

Area = _____

PREVIEW

Gain complete access to the largest collection of worksheets in all subjects!

Members, please log in to download this worksheet.

Not a member? Please sign up to gain complete access.

www.mathworksheets4kids.com