

Name : _____


Counting Squares

L2S1

Find the area of each shape by counting the squares.

1)


Scale :  = 4 ft²



Area = _____

2)


Scale :  = 5 in²



Area = _____

3)


Scale :  = 4 yd²



Area = _____


4)

Scale :  = _____



Area = _____


Scale :  = 2 ft²



Area = _____


7)

Scale :  = _____



Area = _____


Scale :  = 5 yd²



Area = _____

10)


Scale :  = 2 in²



Area = _____

11)


Scale :  = 3 yd²



Area = _____

12)

Scale :  = 2 ft²



Area = _____

PREVIEW
Gain complete access to the largest collection of worksheets in all subjects!

Members, please log in to download this worksheet.

Not a member? Please sign up to gain complete access.

www.mathworksheets4kids.com