

Name : \_\_\_\_\_

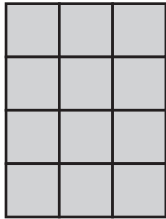
# Counting Squares

L2S3

Find the area of each shape by counting the squares.

1)


Scale :  = 5 yd<sup>2</sup>



Area = \_\_\_\_\_

2)


Scale :  = 2 in<sup>2</sup>



Area = \_\_\_\_\_

3)


Scale :  = 3 ft<sup>2</sup>



Area = \_\_\_\_\_

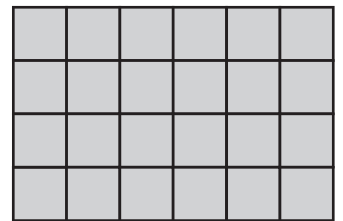
4)

Scale :  = \_\_\_\_\_



Area = \_\_\_\_\_


Scale :  = 2 yd<sup>2</sup>



Area = \_\_\_\_\_


7)

Scale :  = \_\_\_\_\_



Area = \_\_\_\_\_

Scale :  = 5 in<sup>2</sup>



Area = \_\_\_\_\_

10)


Scale :  = 5 in<sup>2</sup>



Area = \_\_\_\_\_

11)


Scale :  = 2 ft<sup>2</sup>



Area = \_\_\_\_\_

12)

Scale :  = 3 yd<sup>2</sup>



Area = \_\_\_\_\_

**PREVIEW**  
Gain complete access to the largest collection of worksheets in all subjects!

Members, please log in to download this worksheet.

Not a member? Please sign up to gain complete access.

[www.mathworksheets4kids.com](http://www.mathworksheets4kids.com)