


Name : \_\_\_\_\_


# Counting Squares


Find the area of each shape by counting the squares.

1) Scale :  =  $2 \text{ ft}^2$




Area = \_\_\_\_\_

2) Scale :  =  $4 \text{ yd}^2$





Area = \_\_\_\_\_

3) Scale :  =  $5 \text{ in}^2$



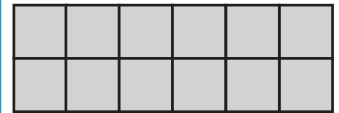
Area = \_\_\_\_\_

4) Scale :  = \_\_\_\_\_




Area = \_\_\_\_\_

Scale :  =  $4 \text{ yd}^2$




Area = \_\_\_\_\_

7) Scale :  = \_\_\_\_\_




Area = \_\_\_\_\_

Scale :  =  $3 \text{ ft}^2$



Area = \_\_\_\_\_

10) Scale :  =  $4 \text{ ft}^2$




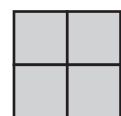
Area = \_\_\_\_\_

11) Scale :  =  $3 \text{ yd}^2$



Area = \_\_\_\_\_

12) Scale :  =  $5 \text{ in}^2$



Area = \_\_\_\_\_

**PREVIEW**

Gain complete access to the largest collection of worksheets in all subjects!

Members, please log in to download this worksheet.

Not a member? Please sign up to gain complete access.

[www.mathworksheets4kids.com](http://www.mathworksheets4kids.com)