

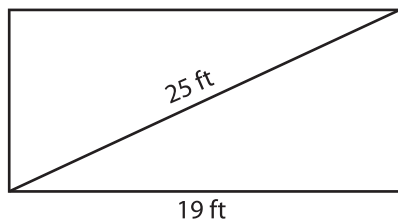
Name : _____

Area of a Rectangle

Sheet 1

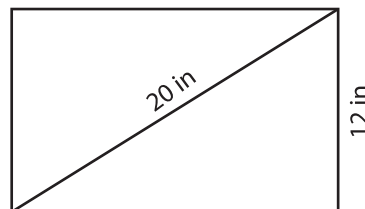
A) Find the area of each rectangle for the given measurements. Round your answer to two decimal places.

1)



Area = _____

2)



Area = _____

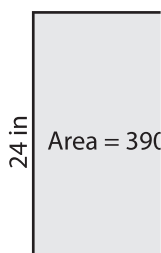
3) The diagonal of a rectangle measures 30 yards. What is the area of the rectangle, if the length is 24 yards?

4) Find the area of the

a width of 7 feet.

B) Find the length of the diagonal of a rectangle if the area is 390 square inches and the width is 24 inches. Round your answer to the nearest tenth.

1)



Diagonal = _____

Round your answer to

8 yd

3) The area of a rectangle is 96 square feet. Find the length of the diagonal, if the width is 6 feet.

4) The length of a rectangle is 31 inches. If the area of the rectangle is 626.17 square inches, find the length of the diagonal.

PREVIEW

Gain complete access to the largest collection of worksheets in all subjects!

Members, please log in to download this worksheet.

Not a member? Please sign up to gain complete access.

www.mathworksheets4kids.com