

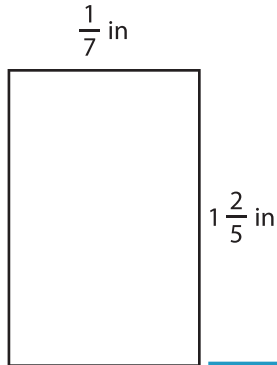
Name : \_\_\_\_\_

## Area of a Rectangle

T1S5

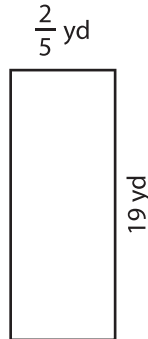
Find the area of each rectangle.

1)

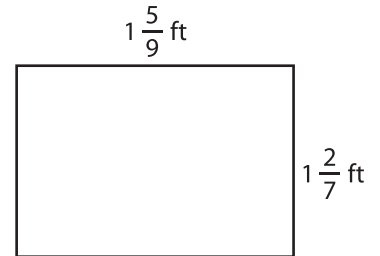


Area =

2)

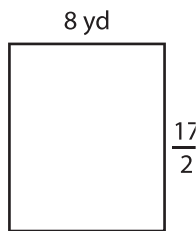


3)



Area =

4)



Area =

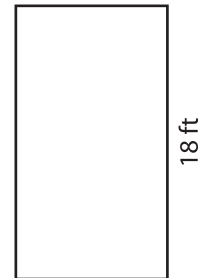
Gain complete access to the largest collection of worksheets in all subjects!

Members, please log in to download this worksheet.

Not a member? Please sign up to gain complete access.


[www.mathworksheets4kids.com](http://www.mathworksheets4kids.com)

$1\frac{1}{9}$  ft

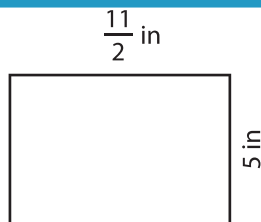


Area =

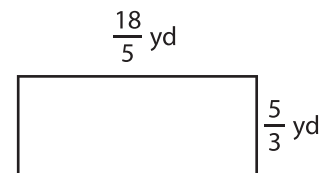
7)



Area =



Area =



Area =