






## Bar Graph - Favorite Soups

Tom did a survey among his classmates on their favorite soup. Draw a bar graph to represent the data given below. Answer the questions.

<b>Vegetable Soup</b>  <b>6</b>	<b>Tomato Soup</b>  <b>5</b>	<b>Chicken Soup</b>  <b>5</b>	<b>Mushroom Soup</b>  <b>8</b>
--	---	---	---




# PREVIEW

Gain complete access to the largest collection of worksheets in all subjects!

Members, please log in to download this worksheet.

Not a member? Please sign up to gain complete access.

[www.mathworksheets4kids.com](http://www.mathworksheets4kids.com)



- 1) Which was the least popular soup? \_\_\_\_\_
- 2) How many classmates voted for tomato soup and chicken soup altogether? \_\_\_\_\_
- 3) Which soup got the greatest number of votes? \_\_\_\_\_
- 4) How many classmates participated in the survey? \_\_\_\_\_