

Capacity Estimation

Customary Units: S2

Estimate the capacity of each object.

1)



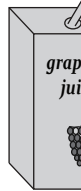
- 1 cup
- 1 pint
- 1 gallon

2)



- 1 pint
- 4 quarts
- 2 cups

3)



- 3 pints
- 1.5 gallons
- 4 quarts



5)



- 1 cup
- 2 pints
- 3 gallons



PREVIEW

Gain complete access to the largest
collection of worksheets in all subjects!

Members, please
log in to
download this
worksheet.

Not a member?
Please sign up to
gain complete
access.

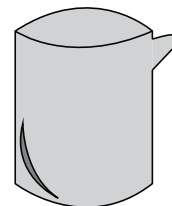
www.mathworksheets4kids.com

7)



- 13 cups
- 4 quarts
- 20 gallons

8)



- 2 quarts
- 10 gallons
- 1 cups

Answer key**Capacity Estimation**

Customary Units: S2

Estimate the capacity of each object.

1)



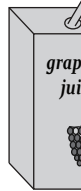
- 1 cup
- 1 pint
- **1 gallon**

2)



- 1 pint
- **4 quarts**
- 2 cups

3)



- 3 pi
- **1.5**
- 4 qu

PREVIEW

Gain complete access to the largest
collection of worksheets in all subjects!

Members, please
log in to
download this
worksheet.

Not a member?
Please sign up to
gain complete
access.

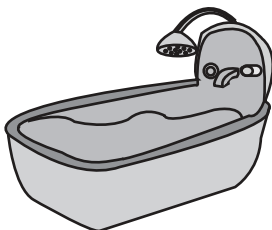
www.mathworksheets4kids.com

5)



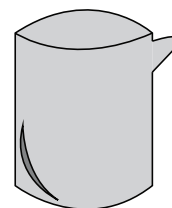
- 1 cu
- **2 pi**
- 3 ga

7)



- 13 cups
- 4 quarts
- **20 gallons**

8)



- **2 quarts**
- 10 gallons
- 1 cups