

Capacity Estimation

Metric Units: S3

Estimate the capacity of each object.

1)



- 20 L
- 2 L
- 200 mL

2)



- 3 L
- 30 mL
- 300 mL

3)



- 2.5 L
- 25 mL



- 50 mL
- 5 L

5)



- 200 mL
- 20 L



- 1 L
- 3 L

PREVIEW


Gain complete access to the largest collection of worksheets in all subjects!

Members, please log in to download this worksheet.

Not a member? Please sign up to gain complete access.

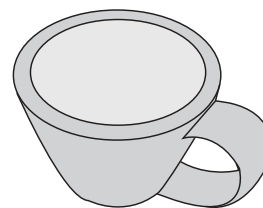
www.mathworksheets4kids.com

7)



- 250 mL
- 25 L
- 2.5 mL

8)




- 10 L
- 10 mL
- 100 mL

Answer key**Capacity Estimation**

Metric Units: S3

Estimate the capacity of each object.

1)



- 20 L
- **2 L**
- 200 mL

2)



- 3 L
- 30 mL
- **300 mL**

3)



- 2.5 L
- **250 mL**




- **500 mL**
- 5 L

5)



- **200 mL**
- 20 L



- 3 L

PREVIEW


Gain complete access to the largest collection of worksheets in all subjects!

Members, please log in to download this worksheet.

Not a member? Please sign up to gain complete access.

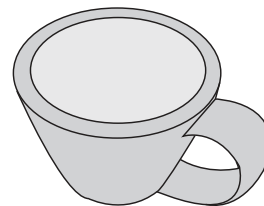
www.mathworksheets4kids.com

7)



- **250 mL**
- 25 L
- 2.5 mL

8)



- 10 L
- 10 mL
- **100 mL**