


**Capacity - More/Less**

Customary Units: S1


Choose the correct choice that best estimates the capacity of each object.

1)



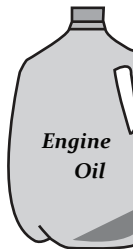
- Less than 3 pints
- More than 3 pints

2)



- Less than 5 quarts
- More than 5 quarts

3)



- Less than 2 quarts
- More than 2 quarts



- Less than 1 quart
- More than 1 quart

5)



- Less than 2 cups
- More than 2 cups



- Less than 1 cup
- More than 1 cup

# PREVIEW

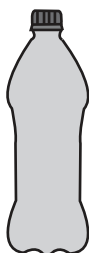
Gain complete access to the largest collection of worksheets in all subjects!

Members, please log in to download this worksheet.

Not a member? Please sign up to gain complete access.


[www.mathworksheets4kids.com](http://www.mathworksheets4kids.com)

7)



- Less than 2 quarts
- More than 2 quarts

8)




- Less than 1 gallon
- More than 1 gallon

**Answer key****Capacity - More/Less**

Customary Units: S1


Choose the correct choice that best estimates the capacity of each object.

1)



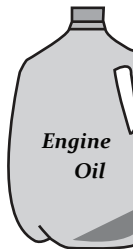
- Less than 3 pints  
 More than 3 pints

2)



- Less than 5 quarts  
 More than 5 quarts

3)



- Less than 2 quarts  
 More than 2 quarts

**PREVIEW**

Gain complete access to the largest collection of worksheets in all subjects!

Members, please log in to download this worksheet.

Not a member? Please sign up to gain complete access.

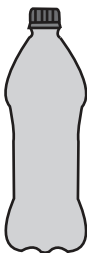
[www.mathworksheets4kids.com](http://www.mathworksheets4kids.com)

5)




- Less than 2 cups  
 More than 2 cups

7)



- Less than 2 quarts  
 More than 2 quarts

8)



- Less than 1 gallon  
 More than 1 gallon