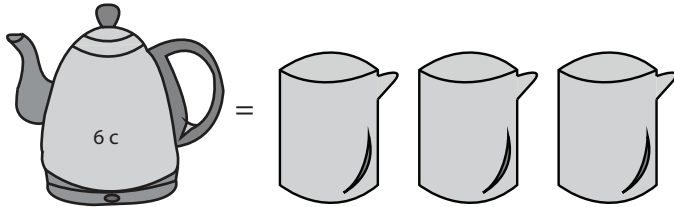


Measuring Capacity

Customary Units: S3

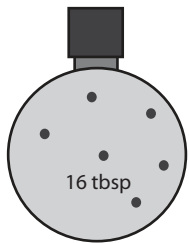
Calculate the capacity.


1)



Capacity of each  = _____ c


2)



each  = _____ tbsp


3)




each  = _____ gal

4)



each  = _____ fl.oz

5)



Capacity of each  = _____ pt

PREVIEW

Gain complete access to the largest collection of worksheets in all subjects!

Members, please log in to download this worksheet.

Not a member? Please sign up to gain complete access.

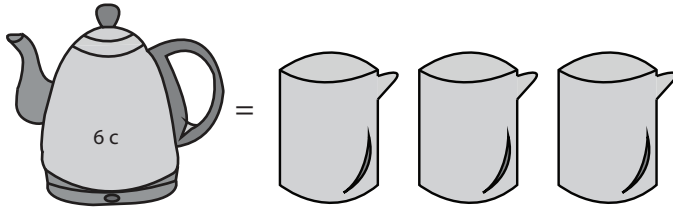
www.mathworksheets4kids.com

Answer key**Measuring Capacity**

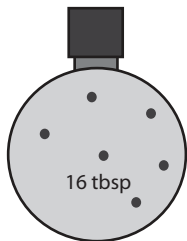

Customary Units: S3

Calculate the capacity.


1)

Capacity of each  = 2 c


2)

each  = 4 tbsp


3)

each  = 1 gal

4)

each  = 3 fl.oz

5)

Capacity of each  = 2 pt

PREVIEW

Gain complete access to the largest collection of worksheets in all subjects!

Members, please log in to download this worksheet.

Not a member? Please sign up to gain complete access.

www.mathworksheets4kids.com