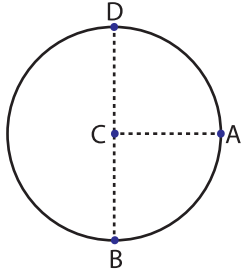


Parts of a Circle

Identify the parts of each circle.

1)

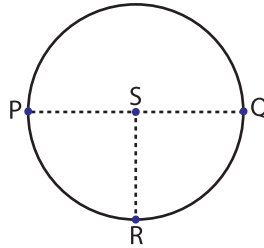


Center = _____

Radius = _____

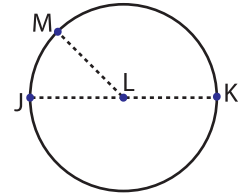
Diameter = _____

2)



Center = _____

3)

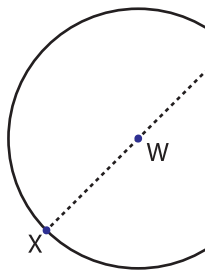


Center = _____

Radius = _____

Diameter = _____

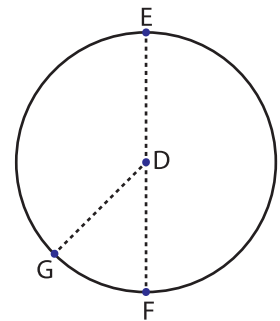
4)



Center = _____

Radius = _____

Diameter = _____

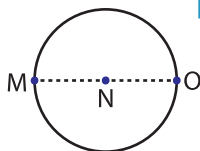


Center = _____

Radius = _____

Diameter = _____

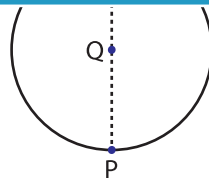
7)



Center = _____

Radius = _____

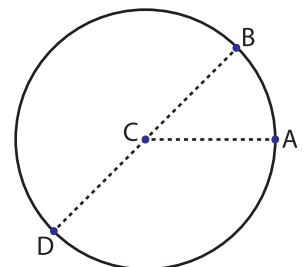
Diameter = _____



Center = _____

Radius = _____

Diameter = _____



Center = _____

Radius = _____

Diameter = _____

PREVIEW

Gain complete access to the largest collection of worksheets in all subjects!

Members, please log in to download this worksheet.

Not a member? Please sign up to gain complete access.

www.mathworksheets4kids.com