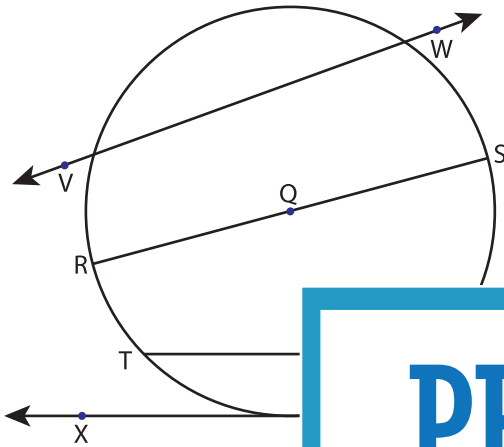


Parts of a Circle

Identify the parts of each circle.

1)

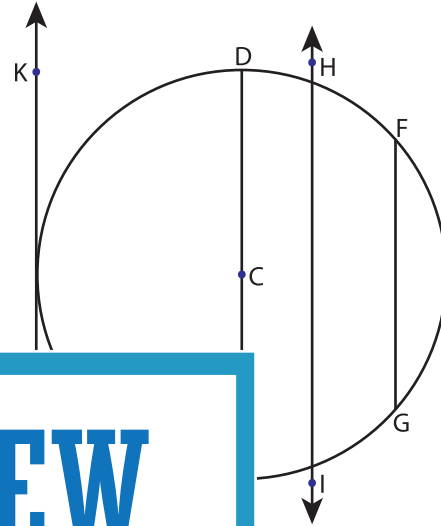


Center = _____

Radius = _____

Diameter = _____

2)

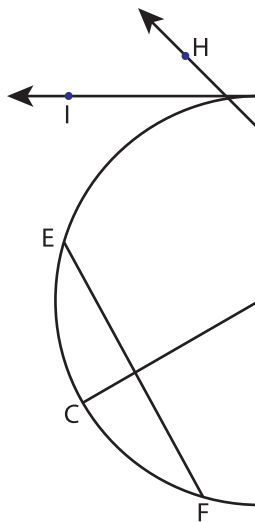


Chord = _____

Tangent = _____

Secant = _____

3)



Center = _____

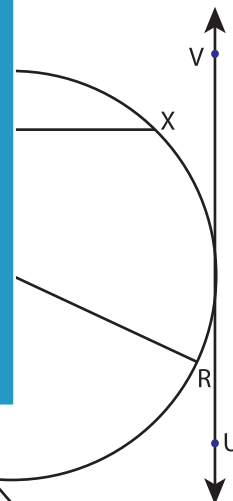
Chord = _____

Radius = _____

Tangent = _____

Diameter = _____

Secant = _____



Center = _____

Chord = _____

Radius = _____

Tangent = _____

Diameter = _____

Secant = _____

PREVIEW

Gain complete access to the largest collection of worksheets in all subjects!

Members, please log in to download this worksheet.

Not a member? Please sign up to gain complete access.

www.mathworksheets4kids.com