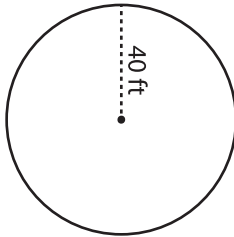


## Radius / Diameter

Find the radius or diameter of each circle.

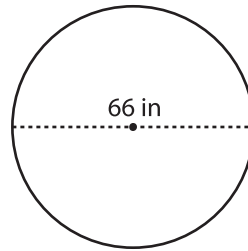
1)



Radius = \_\_\_\_\_

Diameter = \_\_\_\_\_

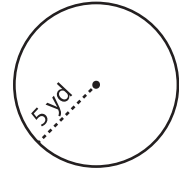
2)



Radius = \_\_\_\_\_

Diameter = \_\_\_\_\_

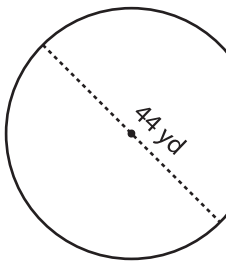
3)



Radius = \_\_\_\_\_

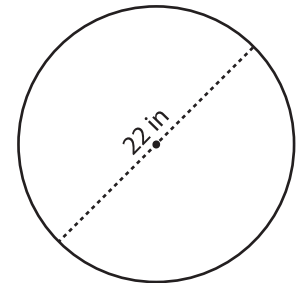
Diameter = \_\_\_\_\_

4)



Radius = \_\_\_\_\_

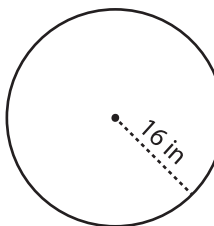
Diameter = \_\_\_\_\_



Radius = \_\_\_\_\_

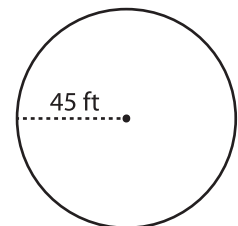
Diameter = \_\_\_\_\_

7)



Radius = \_\_\_\_\_

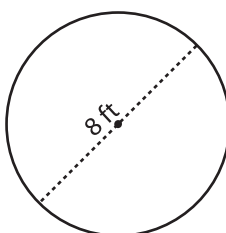
Diameter = \_\_\_\_\_



Radius = \_\_\_\_\_

Diameter = \_\_\_\_\_

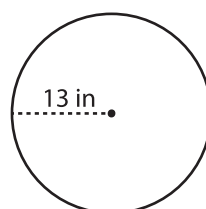
10)



Radius = \_\_\_\_\_

Diameter = \_\_\_\_\_

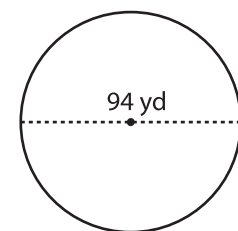
11)



Radius = \_\_\_\_\_

Diameter = \_\_\_\_\_

12)



Radius = \_\_\_\_\_

Diameter = \_\_\_\_\_

# PREVIEW

Gain complete access to the largest collection of worksheets in all subjects!

Members, please log in to download this worksheet.

Not a member? Please sign up to gain complete access.

[www.mathworksheets4kids.com](http://www.mathworksheets4kids.com)