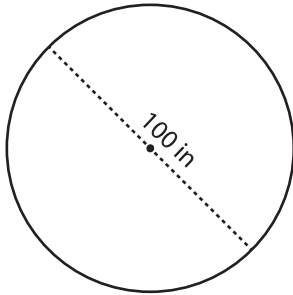


## Radius / Diameter

Find the radius or diameter of each circle.

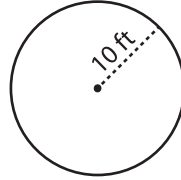
1)



Radius = \_\_\_\_\_

Diameter = \_\_\_\_\_

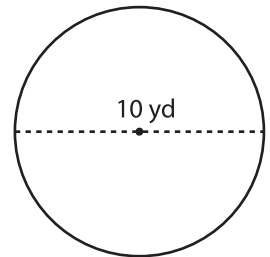
2)



Radius = \_\_\_\_\_

Diameter = \_\_\_\_\_

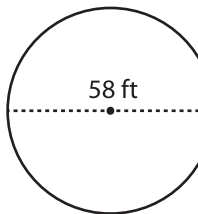
3)



Radius = \_\_\_\_\_

Diameter = \_\_\_\_\_

4)



Radius = \_\_\_\_\_

Diameter = \_\_\_\_\_

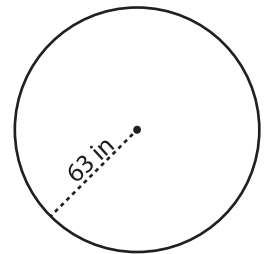
# PREVIEW

Gain complete access to the largest  
collection of worksheets in all subjects!

Members, please  
log in to  
download this  
worksheet.

Not a member?  
Please sign up to  
gain complete  
access.

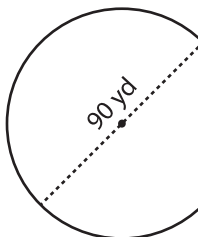
[www.mathworksheets4kids.com](http://www.mathworksheets4kids.com)



Radius = \_\_\_\_\_

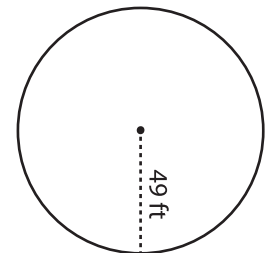
Diameter = \_\_\_\_\_

7)



Radius = \_\_\_\_\_

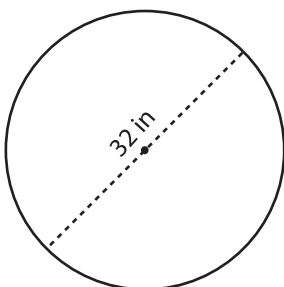
Diameter = \_\_\_\_\_



Radius = \_\_\_\_\_

Diameter = \_\_\_\_\_

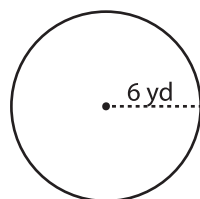
10)



Radius = \_\_\_\_\_

Diameter = \_\_\_\_\_

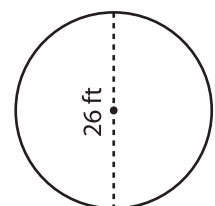
11)



Radius = \_\_\_\_\_

Diameter = \_\_\_\_\_

12)



Radius = \_\_\_\_\_

Diameter = \_\_\_\_\_