


Count and Compare

1)



How many  ? _____

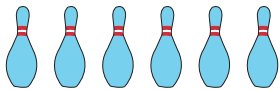


How many  ? _____

Which of these are fewer?




2)



How many  ? _____

Which of these are fewer?



How many  ? _____



PREVIEW


Gain complete access to the largest collection of worksheets in all subjects!

Members, please log in to download this worksheet.

Not a member? Please sign up to gain complete access.


www.mathworksheets4kids.com

3)



How many  ? _____

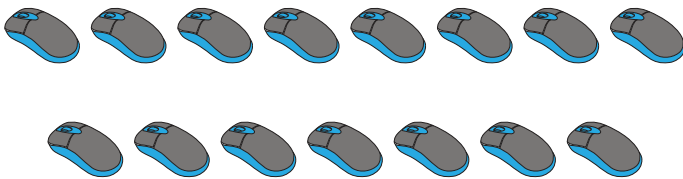
Which of these are fewer?



How many  ? _____




4)



How many  ? _____

Which of these are more?



How many  ? _____

