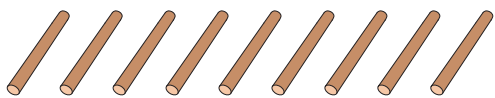


# Comparing Numbers

Write the number of sticks in each set. Compare and circle the appropriate option.

1)

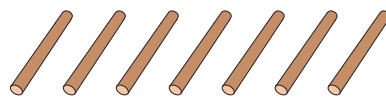


\_\_\_\_\_

is equal to


is less than

is greater than




\_\_\_\_\_

2)



\_\_\_\_\_




\_\_\_\_\_

3)




\_\_\_\_\_



\_\_\_\_\_

4)




\_\_\_\_\_

is equal to



\_\_\_\_\_

5)




\_\_\_\_\_

is equal to

is less than

is greater than



\_\_\_\_\_

**PREVIEW**

Gain complete access to the largest collection of worksheets in all subjects!

Members, please log in to download this worksheet.

Not a member? Please sign up to gain complete access.

[www.mathworksheets4kids.com](http://www.mathworksheets4kids.com)