


Comparing Numbers

Write the number of sticks in each set. Compare and circle the appropriate option.


1)



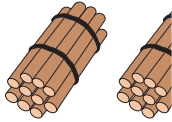
is less than

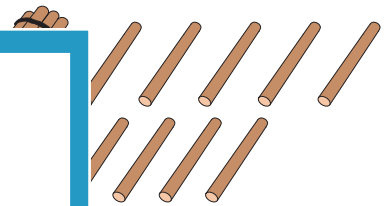
is greater than

is equal to

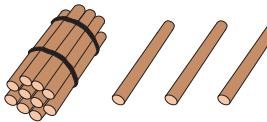


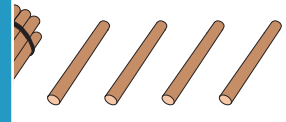
2)



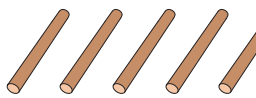


3)

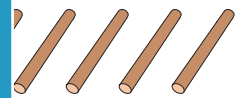





4)



is less than




5)



is less than

is equal to

is greater than



PREVIEW

Gain complete access to the largest collection of worksheets in all subjects!

Members, please log in to download this worksheet.

Not a member? Please sign up to gain complete access.

www.mathworksheets4kids.com