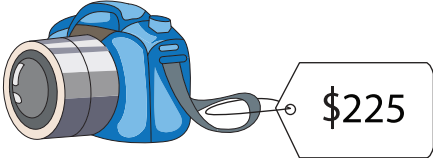

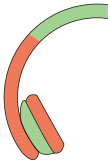


Name : \_\_\_\_\_

## Missing Amount

Sheet 1

A) Find the missing marked price, selling price, or discount.

S.No	Marked price	Discount	Selling price
1)			\$216
2)			
3)			\$119

# PREVIEW

Gain complete access to the largest collection of worksheets in all subjects!

Members, please log in to download this worksheet.

Not a member? Please sign up to gain complete access.

[www.mathworksheets4kids.com](http://www.mathworksheets4kids.com)

B) Find the missing

S.No	Marked price	Discount	Selling price
1)			\$61
2)	\$402		\$447
3)	\$1,675		\$1,533
4)	\$24,860	\$900	