

Name : _____

Discount Percent

Sheet 1

A) Find the discount percent when selling price and marked price are given.

1) Marked price = \$50

Selling price = \$45

2) Marked price = \$6,226

Selling price = \$3,113

3) Marked price = \$100

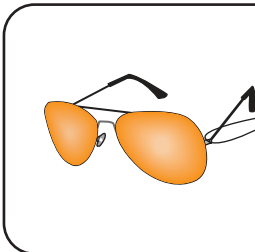
Selling price = _____

4) Marked price = \$55,600

Selling price = \$35,584

B) Write the discount percent on the tag.


1)




Gain complete access to the largest collection of worksheets in all subjects!

Members, please log in to download this worksheet.


Not a member? Please sign up to gain complete access.



2)



www.mathworksheets4kids.com



C) What is the discount percent when the marked price is \$800 and the sale price is \$464?

a) 45%

b) 33%

c) 42%

d) 41%