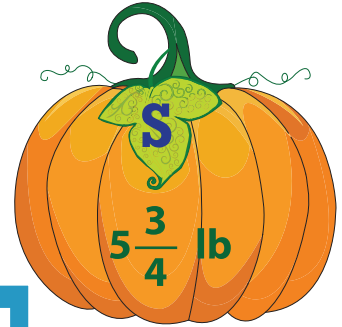


Name : \_\_\_\_\_

## Ordering Fractions - Riddles

Arrange the pumpkins in the increasing order of their weights. Indicate the order from lightest to heaviest using letters mentioned on the pumpkin leaves. Find out what a pumpkin's favorite sport is.




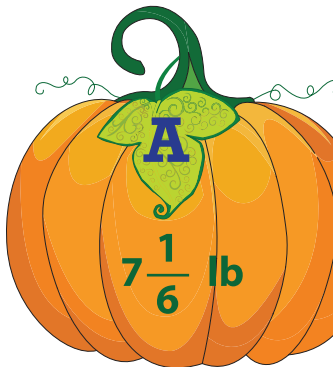
**PREVIEW**

Gain complete access to the largest collection of worksheets in all subjects!

Members, please log in to download this worksheet.

Not a member? Please sign up to gain complete access.

[www.mathworksheets4kids.com](http://www.mathworksheets4kids.com)



--	--	--	--	--	--

A pumpkin's favorite sport is \_\_\_\_\_ .