

Name : \_\_\_\_\_

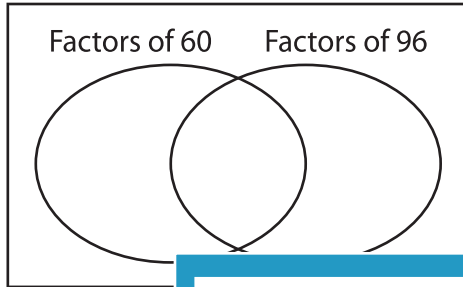
## GCF - Venn Diagram

MS1

Find the greatest common factor for each pair of numbers using Venn diagram.

1) 60, 96

a) Complete the venn diagram.

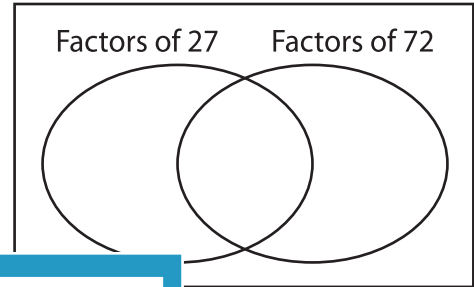


b) Common factors are \_\_\_\_\_

c)  $GCF(60, 96) =$  \_\_\_\_\_

2) 27, 72

a) Complete the venn diagram.




b) Common factors are \_\_\_\_\_

c) \_\_\_\_\_

3) 45, 30

a) Complete the



b) Common factors are \_\_\_\_\_

c)  $GCF(45, 30) =$  \_\_\_\_\_

Gain complete access to the largest collection of worksheets in all subjects!

Members, please log in to download this worksheet.

Not a member? Please sign up to gain complete access.

[www.mathworksheets4kids.com](http://www.mathworksheets4kids.com)

venn diagram.

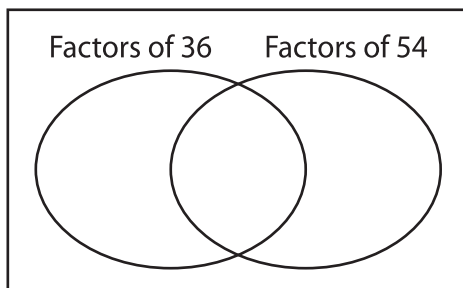
Factors of 84 Factors of 56

b) Common factors are \_\_\_\_\_

c) \_\_\_\_\_

5) 36, 54

a) Complete the



b) Common factors are \_\_\_\_\_

c)  $GCF(36, 54) =$  \_\_\_\_\_

venn diagram.

Factors of 24 Factors of 64

b) Common factors are \_\_\_\_\_

c)  $GCF(24, 64) =$  \_\_\_\_\_