

Name : _____

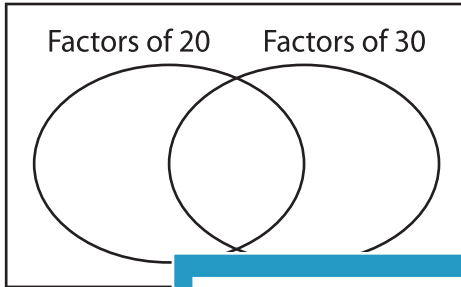
GCF - Venn Diagram

MS2

Find the greatest common factor for each pair of numbers using Venn diagram.

1) 20, 30

a) Complete the venn diagram.

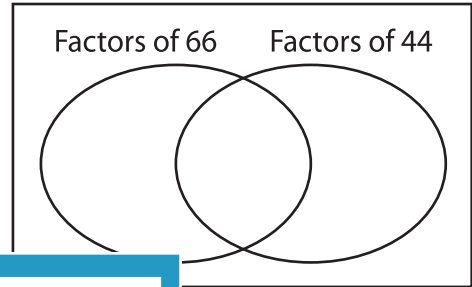


b) Common factors are _____

c) $GCF(20, 30) =$ _____

2) 66, 44

a) Complete the venn diagram.




b) Common factors are _____

c) _____

3) 24, 32

a) Complete the



b) Common factors are _____

c) $GCF(24, 32) =$ _____

Gain complete access to the largest collection of worksheets in all subjects!

Members, please log in to download this worksheet.

Not a member? Please sign up to gain complete access.

www.mathworksheets4kids.com

venn diagram.

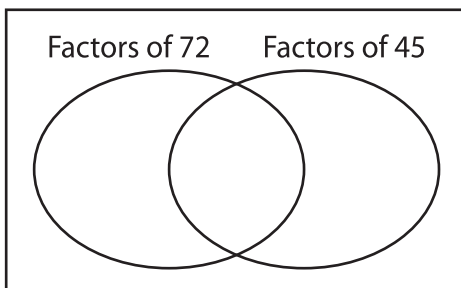
Factors of 36 Factors of 18

b) Common factors are _____

c) _____

5) 72, 45

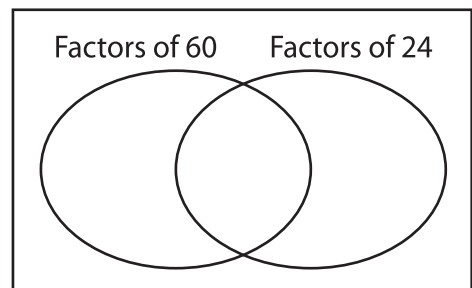
a) Complete the



b) Common factors are _____

c) $GCF(72, 45) =$ _____

venn diagram.



b) Common factors are _____

c) $GCF(60, 24) =$ _____