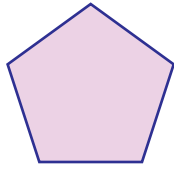


Name : \_\_\_\_\_

## Comparing Sides and Corners

1)



Number of corners: \_\_\_\_\_



Number of corners: \_\_\_\_\_

Which shape has fewer corners? a) pentagon b) rectangle

2)



Number of



s: \_\_\_\_\_

Which shape has r

parallelogram

3)



Number of



s: \_\_\_\_\_

Which shape has fe

triangle

4)




Number of co



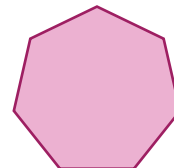
s: \_\_\_\_\_

Which shape has more corners? a) heptagon b) kite

5)



Number of sides: \_\_\_\_\_



Number of sides: \_\_\_\_\_

Which shape has fewer sides? a) pentagon b) heptagon

**PREVIEW**

Gain complete access to the largest collection of worksheets in all subjects!

Members, please log in to download this worksheet.

Not a member? Please sign up to gain complete access.

[www.mathworksheets4kids.com](http://www.mathworksheets4kids.com)