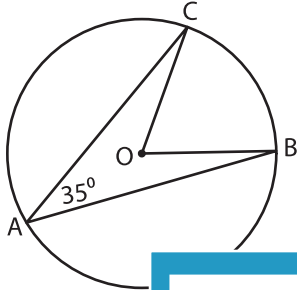


Central and Inscribed Angles

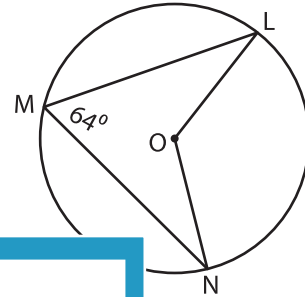
Find the measure of the central angle in each circle using the inscribed angle.

1)



$m\angle BOC =$ _____

2)

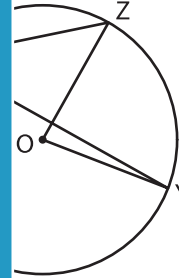


$L =$ _____

3)

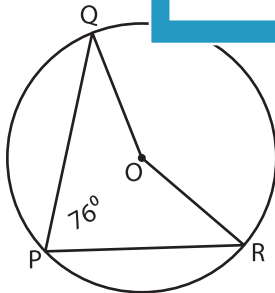


$m\angle EOF =$ _____

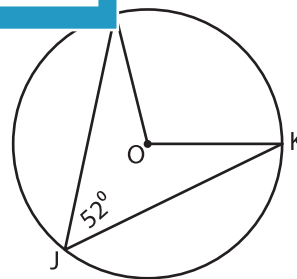


$Z =$ _____

5)



$m\angle QOR =$ _____



$m\angle KOL =$ _____

PREVIEW

Gain complete access to the largest collection of worksheets in all subjects!

Members, please log in to download this worksheet.

Not a member? Please sign up to gain complete access.

www.mathworksheets4kids.com