



Line Segment - Ruler

Centimeter: S2


Measure the length of each line segment.

1) 


cm

2) 


cm

3) 

cm

4) 

cm

5) 

cm

Draw a line segment for

6) 8 cm

7) 2 cm

8) 5 cm

9) 10 cm

10) 12 cm

PREVIEW

Gain complete access to the largest collection of worksheets in all subjects!

Members, please log in to download this worksheet.

Not a member? Please sign up to gain complete access.

www.mathworksheets4kids.com


Answer Key

Line Segment - Ruler


Centimeter: S2

Note : Answers may vary depending on the printer settings.


Measure the length of each line segment.

1) 

3 cm

2) 


11 cm

3) 

6 cm

4) 

4 cm

5) 

9 cm

Draw a line segment for

6) 8 cm



7) 2 cm



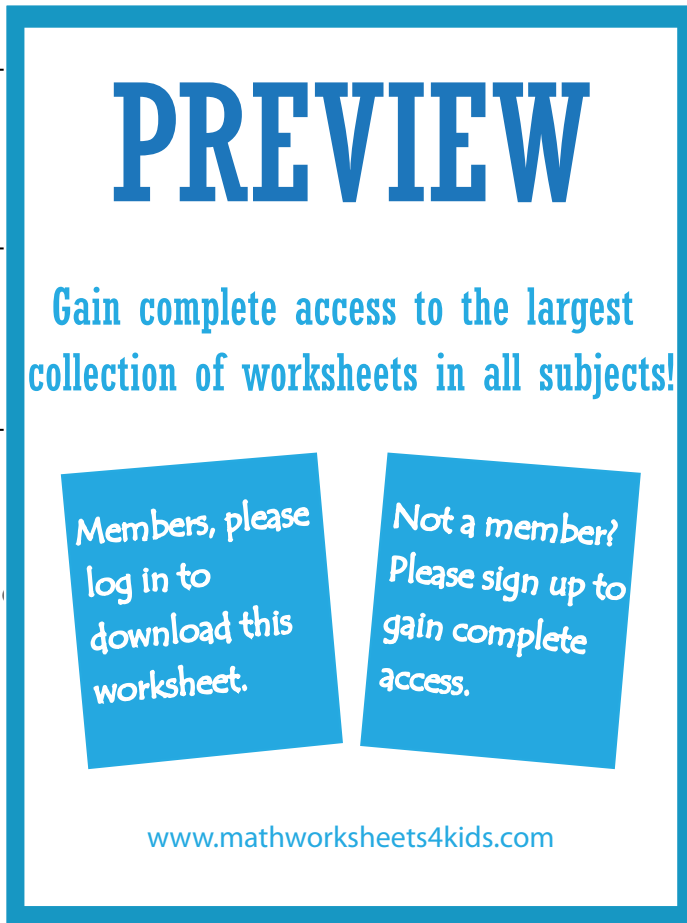
8) 5 cm



9) 10 cm



10) 12 cm



PREVIEW

Gain complete access to the largest collection of worksheets in all subjects!

Members, please log in to download this worksheet.

Not a member? Please sign up to gain complete access.

www.mathworksheets4kids.com