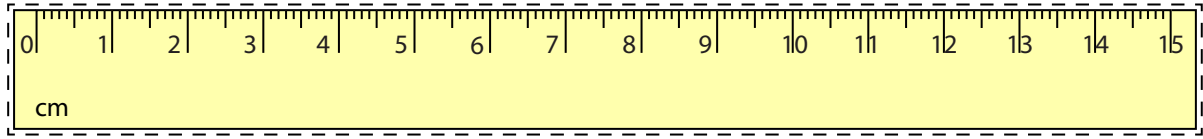



**Line Segment - Ruler**

Centimeter: S2



Cut out the ruler. Measure the length of each line segment.

1)   cm

2)   cm

3)   cm

4)   cm

5)   cm

Draw a line segment for

6) 3 cm

7) 13 cm

8) 10 cm

9) 5 cm

10) 14 cm

# PREVIEW

Gain complete access to the largest collection of worksheets in all subjects!

Members, please log in to download this worksheet.

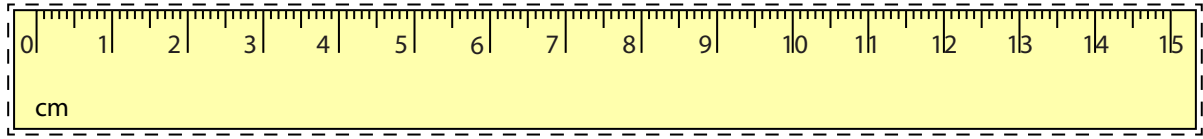
Not a member? Please sign up to gain complete access.

www.mathworksheets4kids.com


**Answer Key**

**Line Segment - Ruler**

Centimeter: S2



Cut out the ruler. Measure the length of each line segment.

1)  **12** cm

2)  **9** cm

3)  **4** cm

4)  **6** cm

5)  **11** cm

Draw a line segment for

6) 3 cm 

7) 13 cm 

8) 10 cm 

9) 5 cm 

10) 14 cm 

# PREVIEW

Gain complete access to the largest collection of worksheets in all subjects!

Members, please log in to download this worksheet.

Not a member? Please sign up to gain complete access.

[www.mathworksheets4kids.com](http://www.mathworksheets4kids.com)