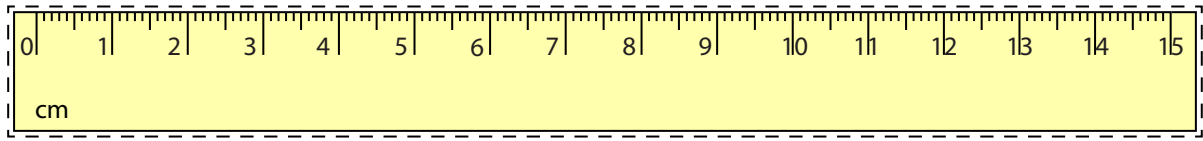


**Line Segment - Ruler**

Millimeter: 53



Cut out the ruler. Measure the length of each line segment.

1)   mm

2)   mm

3)   mm

4)   mm

5)   mm

# PREVIEW

Gain complete access to the largest collection of worksheets in all subjects!

Members, please log in to download this worksheet.

Not a member? Please sign up to gain complete access.

[www.mathworksheets4kids.com](http://www.mathworksheets4kids.com)

Draw a line segment for

6) 78 mm

7) 130 mm

8) 20 mm

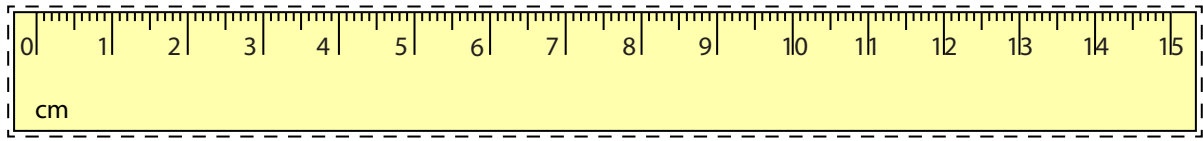
9) 97 mm

10) 121 mm


**Answer Key**

**Line Segment - Ruler**


Millimeter: 53




Cut out the ruler. Measure the length of each line segment.




**29** mm




**145** mm



**80** mm



**66** mm



**110** mm

# PREVIEW

Gain complete access to the largest collection of worksheets in all subjects!

Members, please log in to download this worksheet.

Not a member? Please sign up to gain complete access.

www.mathworksheets4kids.com

Draw a line segment for

6) 78 mm



7) 130 mm



8) 20 mm



9) 97 mm



10) 121 mm

