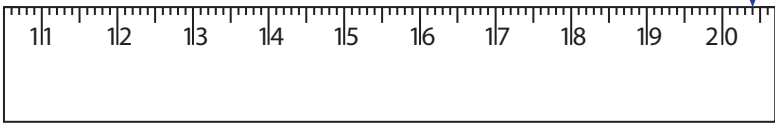
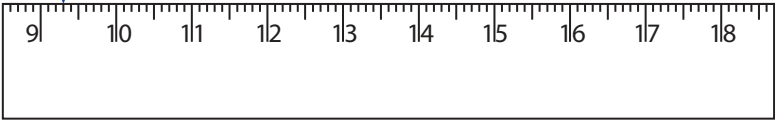


Reading & Marking Ruler

Centimeter and Millimeter: S3

Write the reading shown by the pointer in each problem.

1)  _____ cm _____ mm

2)  _____ cm _____ mm

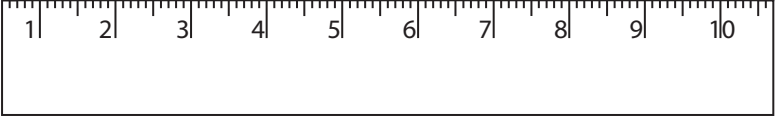
3)  _____ cm _____ mm

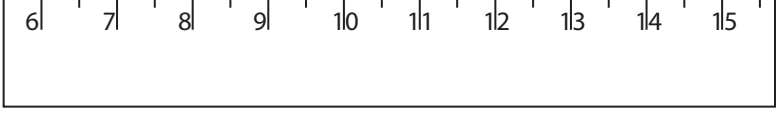
4)  _____ cm _____ mm

Draw the pointer to show

5) 10 cm 6 mm 

6) 4 cm 7 mm 

7) 2 cm 8 mm 

8) 12 cm 1 mm 

PREVIEW

Gain complete access to the largest collection of worksheets in all subjects!

Members, please log in to download this worksheet.


Not a member? Please sign up to gain complete access.

www.mathworksheets4kids.com


Reading & Marking Ruler

Write the reading shown by the pointer in each problem.

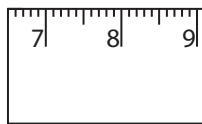
1)

**20** cm **4** mm

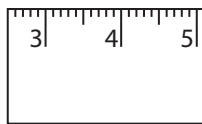
2)

**9** cm **3** mm

3)


**13** cm **2** mm

4)

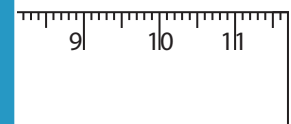
**6** cm **5** mm

Draw the pointer to show


5) 10 cm 6 mm



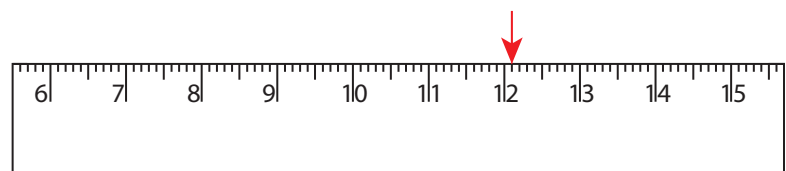
6) 4 cm 7 mm



7) 2 cm 8 mm



8) 12 cm 1 mm

**PREVIEW**Gain complete access to the largest
collection of worksheets in all subjects!Members, please
log in to
download this
worksheet.Not a member?
Please sign up to
gain complete
access.www.mathworksheets4kids.com