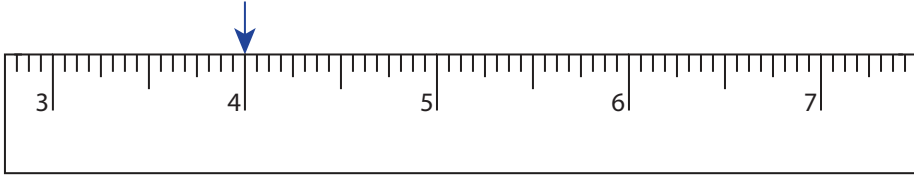
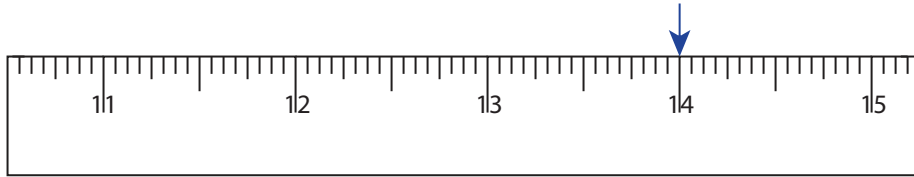


Reading & Marking Ruler

Whole inches: S2

Write the reading shown by the pointer in each problem.

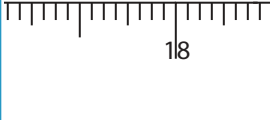
1)  _____ in

2)  _____ in


3)  _____ in

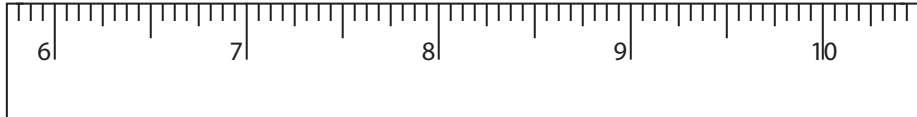
4)  _____ in

Draw the pointer to show

5) 16 in 

6) 20 in 

7) 10 in 

8) 7 in 

PREVIEW

Gain complete access to the largest collection of worksheets in all subjects!

Members, please log in to download this worksheet.

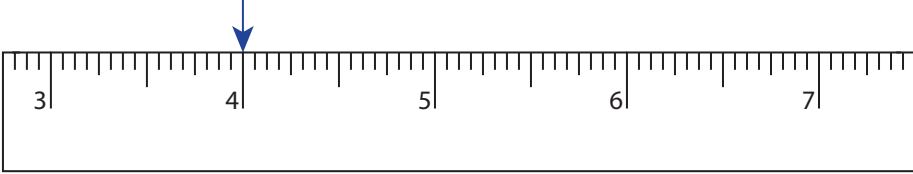
Not a member? Please sign up to gain complete access.

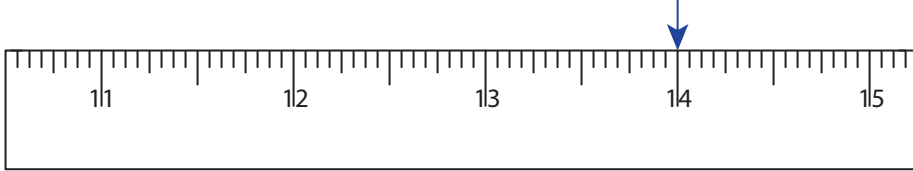
www.mathworksheets4kids.com

Reading & Marking Ruler

Whole inches: S2

Write the reading shown by the pointer in each problem.

1)  _____ **4** in

2)  _____ **14** in

3)  _____ **17** in

4)  _____ **8** in

PREVIEW

Gain complete access to the largest collection of worksheets in all subjects!

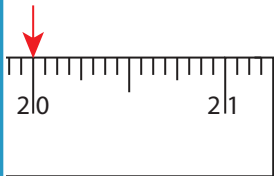
Members, please log in to download this worksheet.

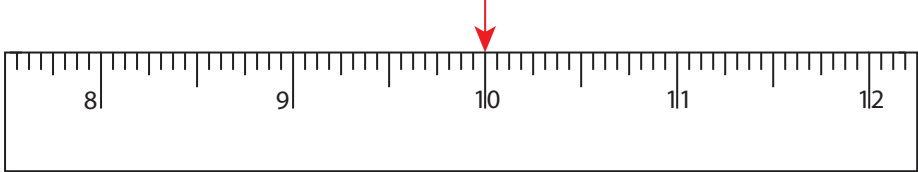
Not a member? Please sign up to gain complete access.

www.mathworksheets4kids.com

Draw the pointer to show

5) 16 in 

6) 20 in 

7) 10 in 

8) 7 in 