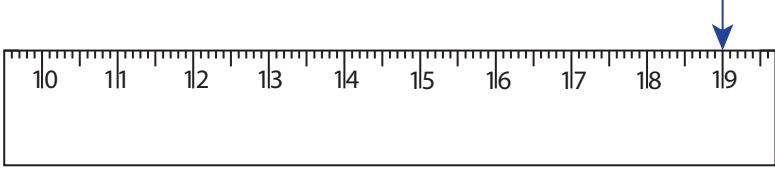
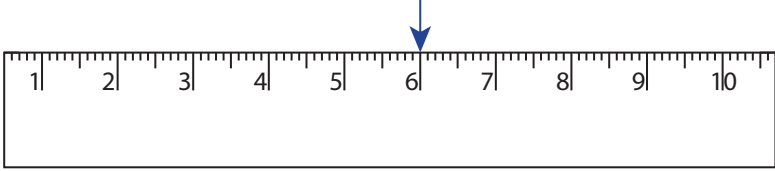


**Reading & Marking Ruler**

Whole centimeter: S2

Write the reading shown by the pointer in each problem.

1)  \_\_\_\_\_ cm

2)  \_\_\_\_\_ cm

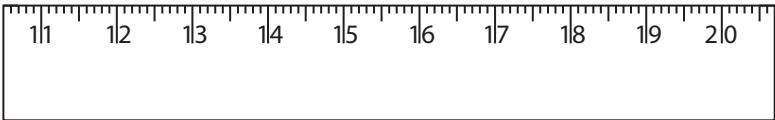
3)  \_\_\_\_\_ cm


4)  \_\_\_\_\_ cm

Draw the pointer to show

5) 12 cm 

6) 11 cm 

7) 20 cm 

8) 15 cm 

**PREVIEW**

Gain complete access to the largest collection of worksheets in all subjects!

Members, please log in to download this worksheet.

Not a member? Please sign up to gain complete access.

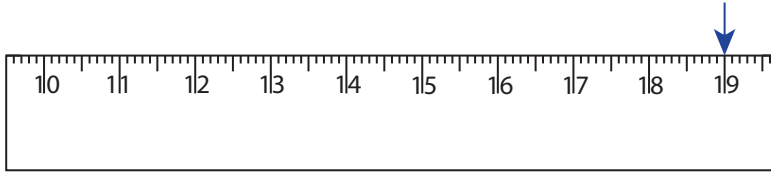
[www.mathworksheets4kids.com](http://www.mathworksheets4kids.com)

## Reading &amp; Marking Ruler

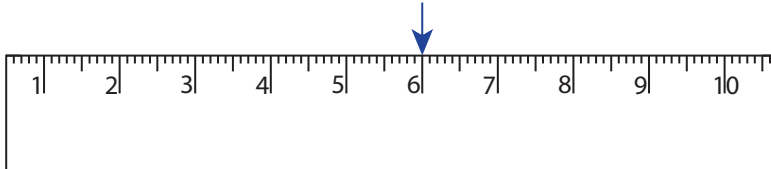
Whole centimeter: 52

Write the reading shown by the pointer in each problem.

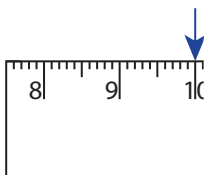
1)

19 cm


2)

6 cm

3)


10 cm

4)


13 cm

Draw the pointer to show


5) 12 cm



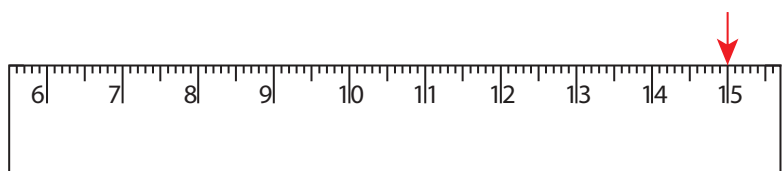
6) 11 cm



7) 20 cm



8) 15 cm

**PREVIEW**

Gain complete access to the largest collection of worksheets in all subjects!

Members, please log in to download this worksheet.

Not a member? Please sign up to gain complete access.

[www.mathworksheets4kids.com](http://www.mathworksheets4kids.com)