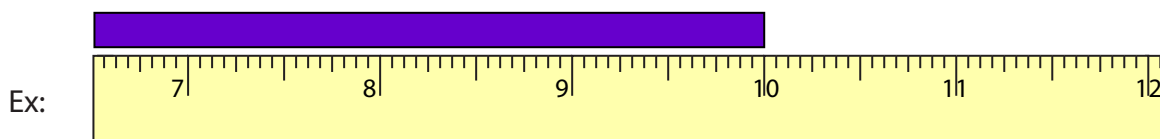


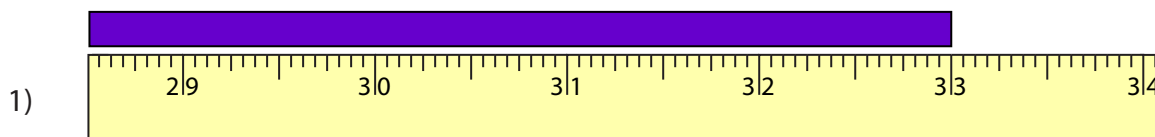
Reading Tapes

Whole inches: S2

Measure the length of each bar.



_____ **10** _____ in



_____ in



_____ in



_____ in



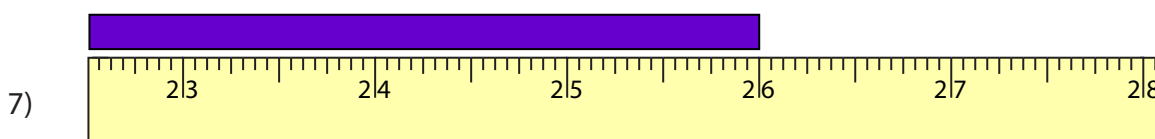
_____ in



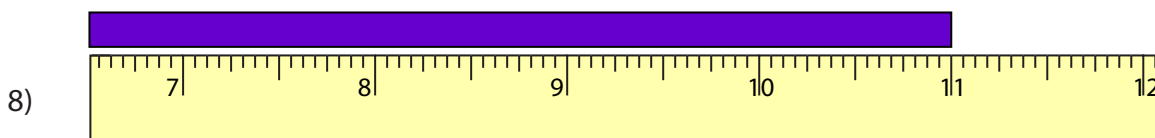
_____ in



_____ in



_____ in



_____ in

PREVIEW

Gain complete access to the largest collection of worksheets in all subjects!

Members, please log in to download this worksheet.

Not a member? Please sign up to gain complete access.

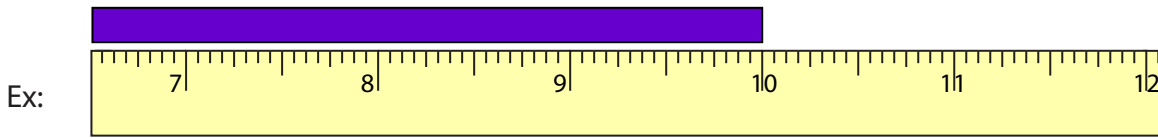
www.mathworksheets4kids.com

Answer key

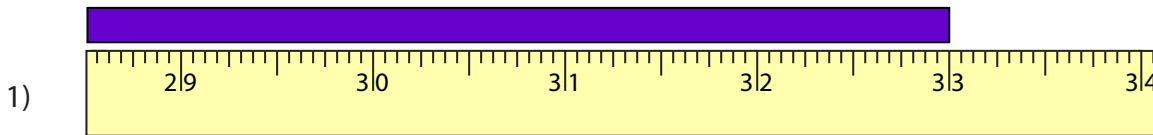
Reading Tapes

Whole inches: S2

Measure the length of each bar.



10 in



33 in



45 in



13 in



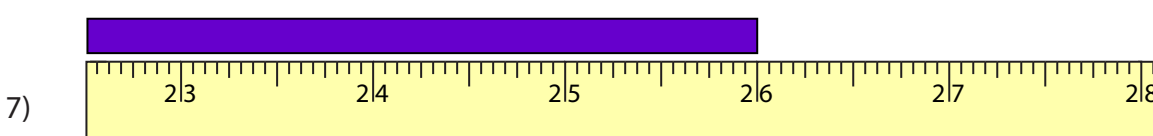
39 in



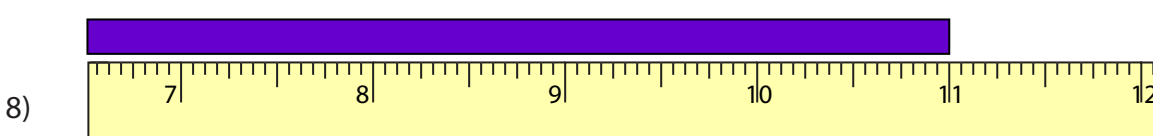
17 in



14 in



26 in



11 in

PREVIEW

Gain complete access to the largest collection of worksheets in all subjects!

Members, please log in to download this worksheet.

Not a member? Please sign up to gain complete access.

www.mathworksheets4kids.com