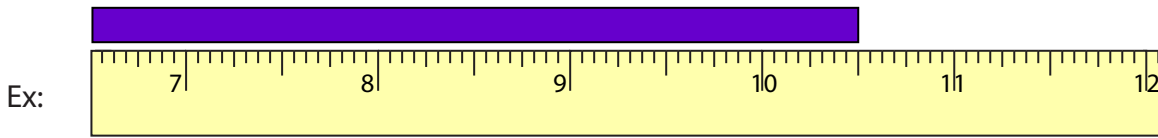


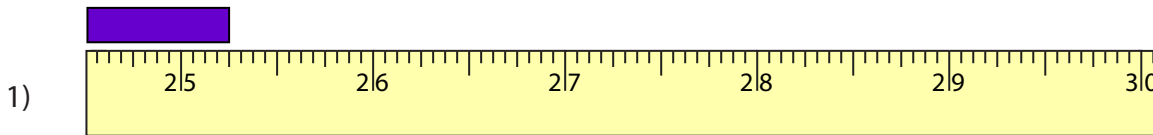
Reading Tapes

Halves and Quarters: S3

Measure the length of each bar.



_____ $10 \frac{1}{2}$ in



_____ in



_____ in



_____ in



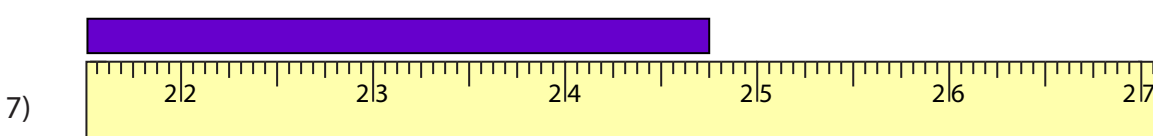
_____ in



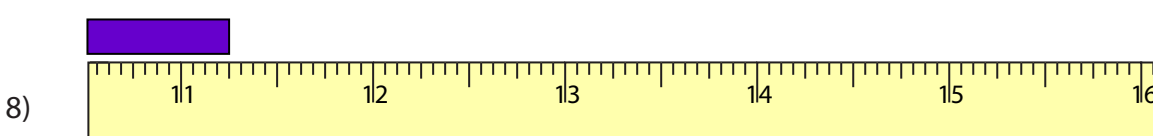
_____ in



_____ in



_____ in



_____ in

PREVIEW

Gain complete access to the largest collection of worksheets in all subjects!

Members, please log in to download this worksheet.

Not a member? Please sign up to gain complete access.

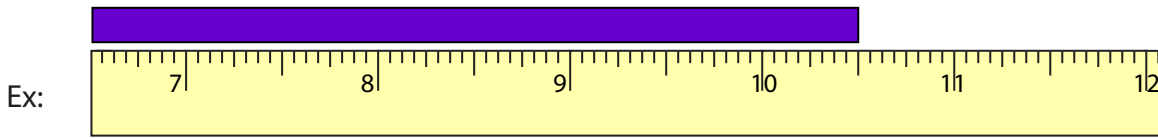
www.mathworksheets4kids.com

Answer key

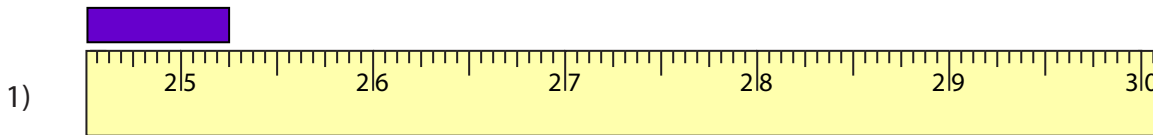
Reading Tapes

Halves and Quarters: S3

Measure the length of each bar.



10 $\frac{1}{2}$ in



25 $\frac{1}{4}$ in



49 $\frac{1}{2}$ in



19 $\frac{3}{4}$ in



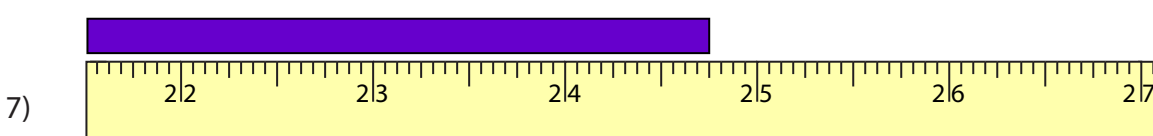
37 $\frac{1}{4}$ in



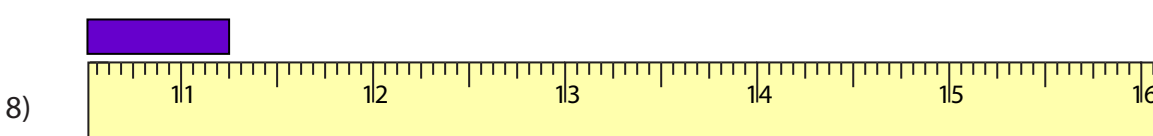
12 $\frac{3}{4}$ in



19 $\frac{1}{2}$ in



24 $\frac{3}{4}$ in



11 $\frac{1}{4}$ in

PREVIEW

Gain complete access to the largest collection of worksheets in all subjects!

Members, please log in to download this worksheet.

Not a member? Please sign up to gain complete access.

www.mathworksheets4kids.com