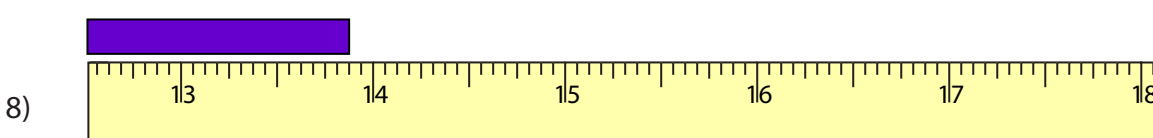
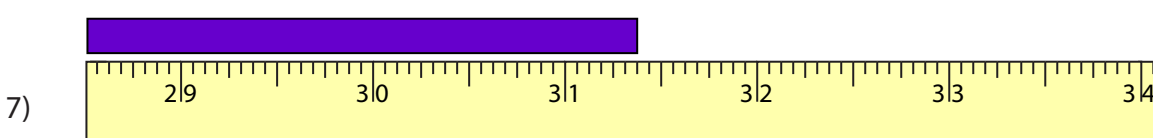
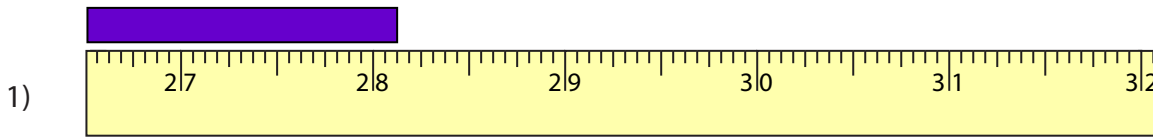
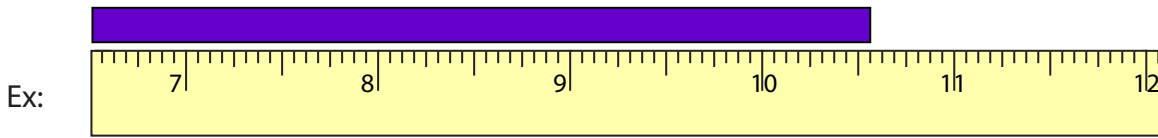


**Reading Tapes**

One-sixteenth: S1

Measure the length of each bar.



**PREVIEW**

Gain complete access to the largest collection of worksheets in all subjects!

Members, please log in to download this worksheet.

Not a member? Please sign up to gain complete access.

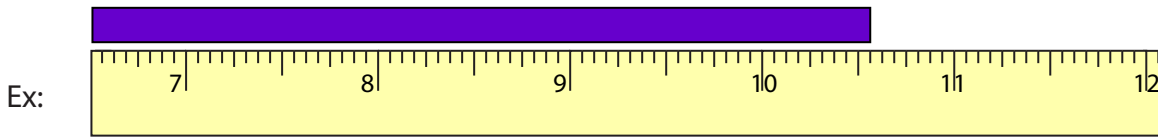
[www.mathworksheets4kids.com](http://www.mathworksheets4kids.com)

**Answer key**

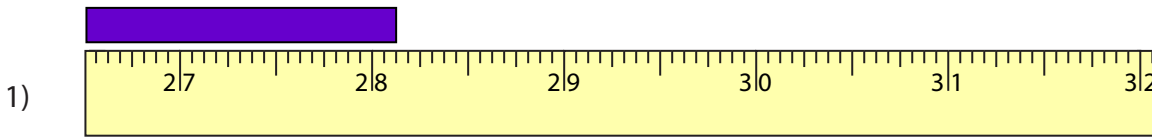
**Reading Tapes**

One-sixteenth: S1

Measure the length of each bar.



10  $\frac{9}{16}$  in



28  $\frac{1}{8}$  in



47  $\frac{5}{16}$  in



18  $\frac{15}{16}$  in



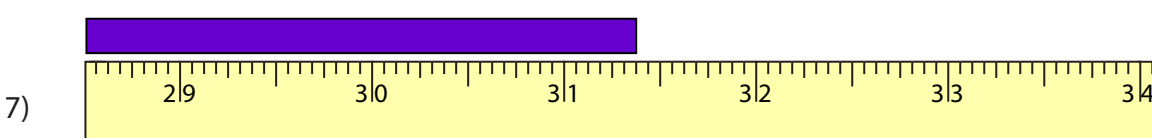
37  $\frac{5}{8}$  in



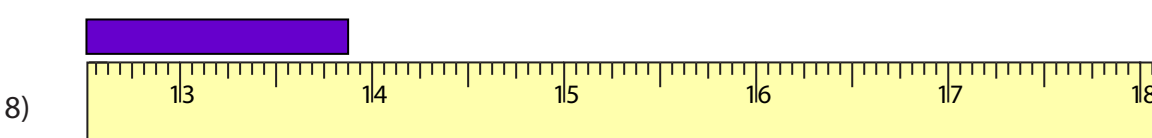
13  $\frac{1}{16}$  in



21  $\frac{9}{16}$  in



31  $\frac{3}{8}$  in



13  $\frac{7}{8}$  in

**PREVIEW**

Gain complete access to the largest collection of worksheets in all subjects!

Members, please log in to download this worksheet.

Not a member? Please sign up to gain complete access.

[www.mathworksheets4kids.com](http://www.mathworksheets4kids.com)