

Lines, Rays or Line segments: MCQ


Identify the model as a line, ray or line segment.

1)



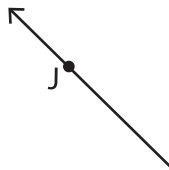
- a) line segment AB
- b) line AB
- c) ray AB
- d) none of the above

2)



- a) line segment UV
- b) line UV
- d) none of the above

3)



PREVIEW

Gain complete access to the largest collection of worksheets in all subjects!

Members, please log in to download this worksheet.

Not a member? Please sign up to gain complete access.

www.mathworksheets4kids.com


- b) ray KJ
- d) none of the above

4)



- b) ray PQ
- d) none of the above

5)



- b) line segment MN
- c) line MN
- d) none of the above

6)



- a) line segment XY
- b) line XY
- c) ray XY
- d) none of the above