

Lines, Rays or Line segments: MCQ


1) Which one of the following is a line?

- a) 
- b) 
- c) 
- d) 

2) Which one of the following is a line segment?

- a) 
- b) 
- c) 
- d) 

3) Which one of the following is a line?

- a) 
- b) 
- c) 
- d) 

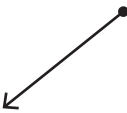



4) Which one of the following is a line segment?

- a) 
- b) 
- c) 
- d) 

5) Which one of the following is a line?

- a) 
- b) 
- c) 
- d) 

6) Which one of the following is a line?

- a) 
- b) 
- c) 
- d) 

7) Which one of the following is a line segment?

- a) 
- b) 
- c) 
- d) 

PREVIEW

Gain complete access to the largest collection of worksheets in all subjects!

Members, please log in to download this worksheet.

Not a member? Please sign up to gain complete access.

www.mathworksheets4kids.com