

Name : _____

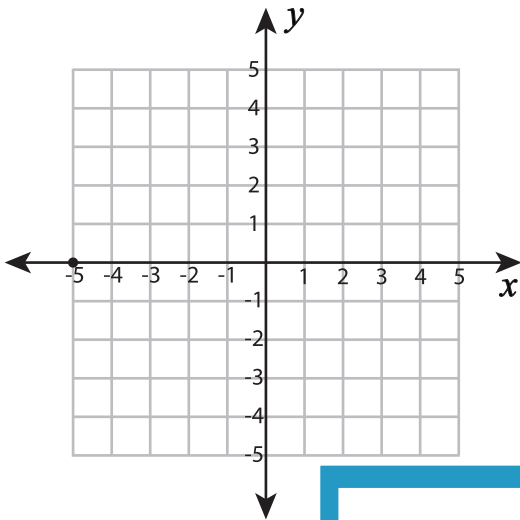
Plotting Points - Shapes

All quadrants: S2

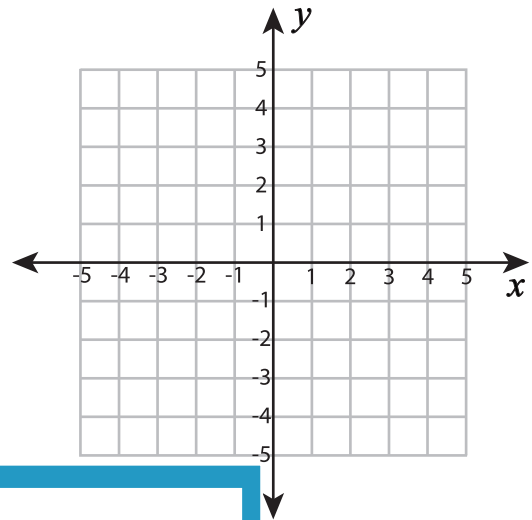
Plot and join the points in the given order. Complete the figure by joining the end points. Identify the shape.

1) $(-2, 3), (1, 0), (-1, -2), (-3, -2), (-5, 0)$

2) $(-2, 1), (-2, 4), (1, 4), (1, 1)$

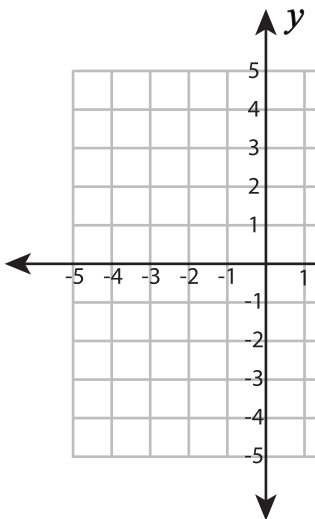


Shape: _____



Shape: _____

3) $(3, 2), (4, -2), (-2, -2)$



Shape: _____

PREVIEW

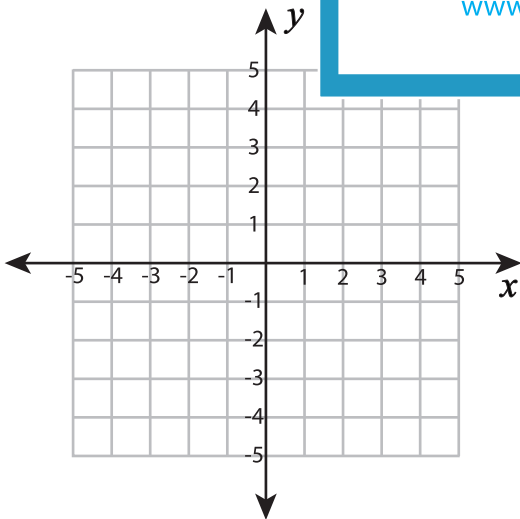
Gain complete access to the largest collection of worksheets in all subjects!

Members, please log in to download this worksheet.

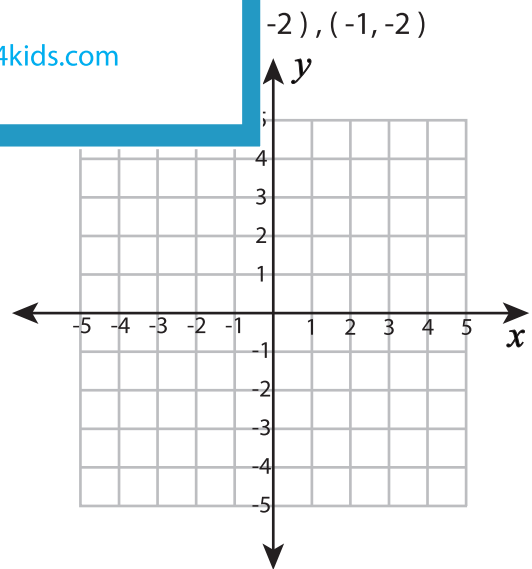
Not a member? Please sign up to gain complete access.

www.mathworksheets4kids.com

5) $(3, 5), (3, -5), (-2, -2)$



Shape: _____



Shape: _____