






Identifying Shape Pattern






ES1

Complete the shape pattern.

1)

					
---	---	---	---	---	--

2)

					
---	---	---	---	---	--

3)

					
--	--	--	--	--	--






4)

					
---	---	---	---	---	--


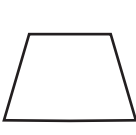
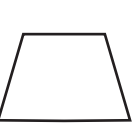

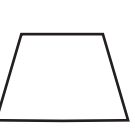
5)

					
---	---	---	---	---	--

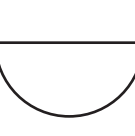
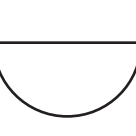
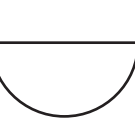


6)

					
---	---	---	---	---	--

7)

					
---	---	---	---	---	--

8)

					
---	---	---	---	---	--

PREVIEW

Gain complete access to the largest collection of worksheets in all subjects!

Members, please log in to download this worksheet.

Not a member? Please sign up to gain complete access.

www.mathworksheets4kids.com